


Bleib oben!

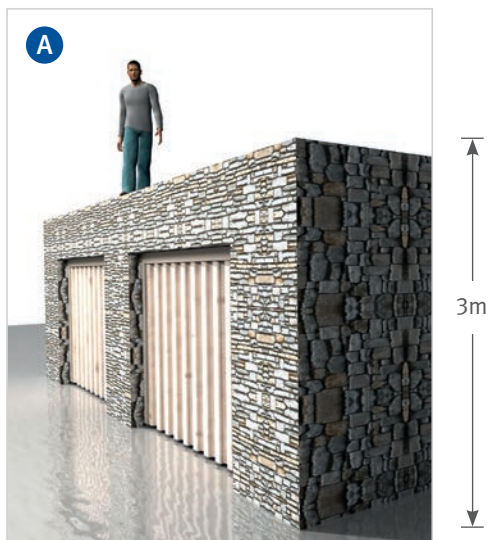


Quiz – Campaign „Keep up!“


Safety on ladders and stiles



**Choose the appropriate device (please see next page I-V)
for each of the situations shown below (A-E):**



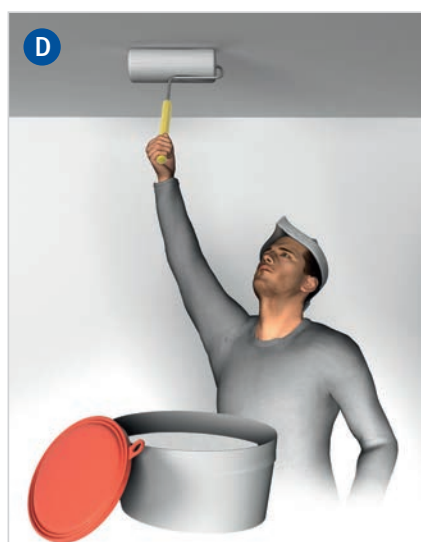
To climb up onto a roof




To clean a window



Exchange a fluorescent lamp



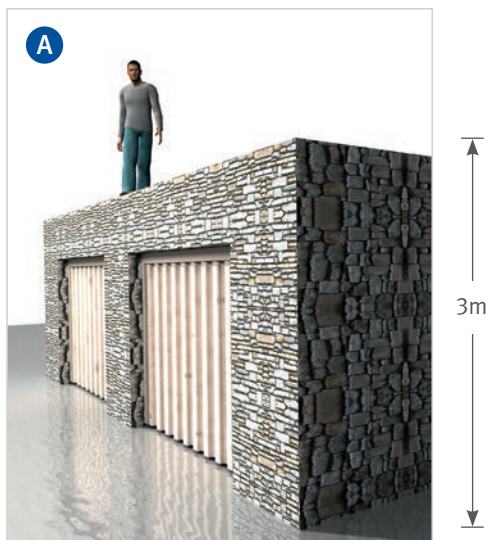
For painting the ceiling




Take boxes off the shelf



**Choose the appropriate device (please see next page I-V)
for each of the situations shown below (A-E):**



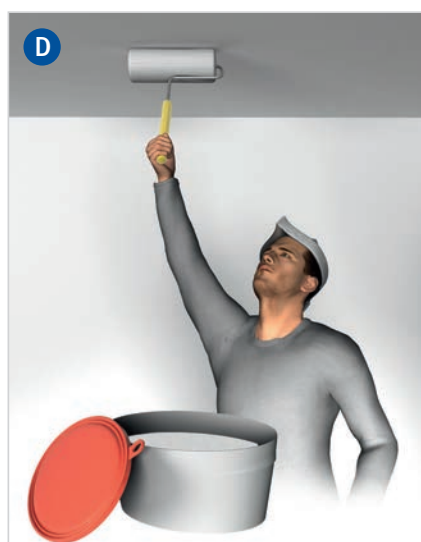
To climb up onto a roof




To clean a window



Exchange a fluorescent lamp



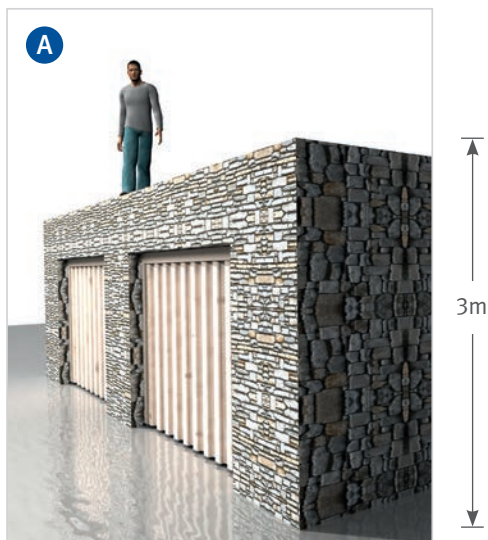
For painting the ceiling




Take boxes off the shelf



**Choose the appropriate device (please see next page I-V)
for each of the situations shown below (A-E):**



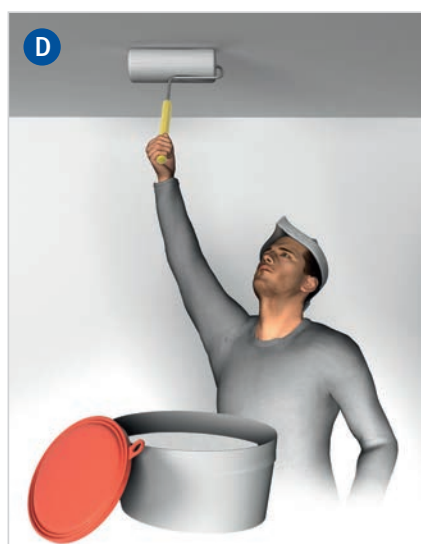
To climb up onto a roof




To clean a window



Exchange a fluorescent lamp



For painting the ceiling



Take boxes off the shelf



**Choose the appropriate device (please see I-V)
for each of the situations shown before (A-E):**



A-frame stepladder



Wheeled scaffolding



Leaning ladder



Mobile elevating work platform



Platform ladder

Solution:


Choose the appropriate device (please see I-V)
for each of the situations shown before (A-E):

A = <input type="radio"/>	B = <input type="radio"/>
C = <input type="radio"/>	D = <input type="radio"/>
E = <input type="radio"/>	



When will the ladder tip over?

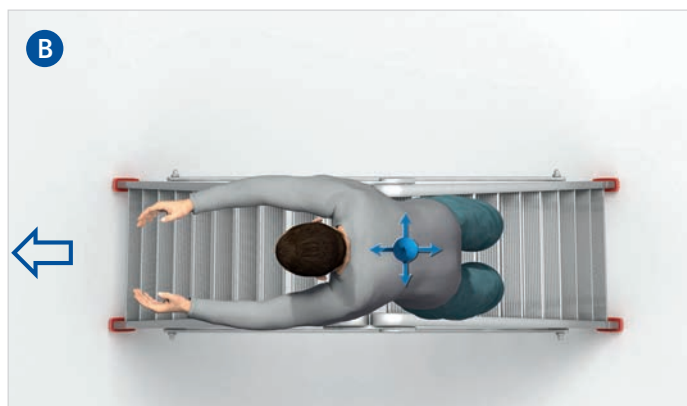
The ladder as seen from above:



1. In which direction is this ladder more stable?



In direction **A** ☐




In direction **B** ☐



When will the ladder tip over?


2. When will this ladder become unstable?



As shown in **A** ☐



As shown in **B** ☐



As shown in **C** ☐



Situations at work – Is safe working possible?

Please decide, whether a safe manner of working is provided in the images shown below and please state a reason.



Yes ☐ No ☐

Reason:

.....

.....

.....

.....

.....

.....



Yes ☐ No ☐

Reason:

.....

.....

.....

.....

.....

.....



Yes ☐ No ☐

Reason:

.....

.....

.....

.....

.....

.....



Situations at work – Is safe working possible?

Please decide, whether a safe manner of working is provided in the images shown below and please state a reason.



Yes ☐ No ☐

Reason:

.....

.....

.....

.....

.....

.....



Yes ☐ No ☐

Reason:

.....

.....

.....

.....

.....

.....



Yes ☐ No ☐

Reason:

.....

.....

.....

.....

.....

.....



Situations at work – Is safe working possible?

Please decide, whether a safe manner of working is provided in the images shown below and please state a reason.



Yes ☐ No ☐

Reason:

.....

.....

.....

.....

.....

.....



Yes ☐ No ☐

Reason:

.....

.....

.....

.....

.....

.....



Yes ☐ No ☐

Reason:

.....

.....

.....

.....


.....

.....



Situations at work – Is safe working possible?

Please decide, whether a safe manner of working is provided in the images shown below and please state a reason.



Yes ☐ No ☐

Reason:

.....

.....

.....

.....

.....

.....



Yes ☐ No ☐

Reason:

.....

.....

.....

.....

.....

.....



Yes ☐ No ☐

Reason:

.....

.....

.....

.....

.....

.....



Notes



Notes

Berufsgenossenschaft
Nahrungsmittel und Gastgewerbe

Geschäftsbereich Prävention
Sicherheit
Karin Carl-Mattarocci
Dynamostraße 7-11
68165 Mannheim
karin.carl-mattarocci@bgn.de
www.bgn.de



**Choose the appropriate device (please see I-V)
for each of the situations shown before (A-E):**



A-frame stepladder



Wheeled scaffolding



Leaning ladder



Mobile elevating work platform



Platform ladder

Solution:


Choose the appropriate device (please see I-V)
for each of the situations shown before (A-E):

A = <input type="radio"/>	B = <input type="radio"/>
C = <input type="radio"/>	D = <input type="radio"/>
E = <input type="radio"/>	



When will the ladder tip over?

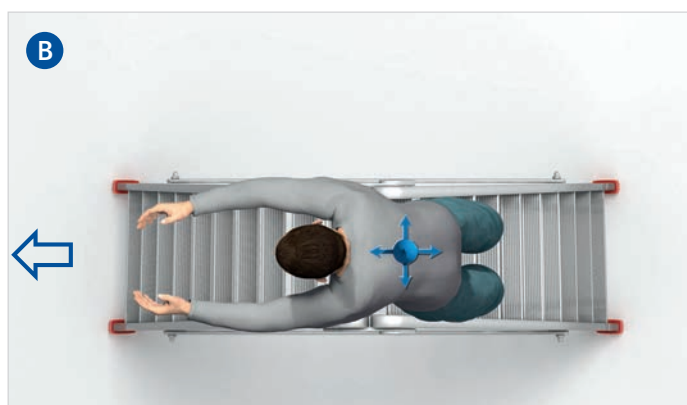
The ladder as seen from above:



1. In which direction is this ladder more stable?



In direction **A** ☐




In direction **B** ☐



When will the ladder tip over?


2. When will this ladder become unstable?



As shown in **A** ☐



As shown in **B** ☐



As shown in **C** ☐



Situations at work – Is safe working possible?

Please decide, whether a safe manner of working is provided in the images shown below and please state a reason.



Yes ☐ No ☐

Reason:

.....

.....

.....

.....

.....

.....



Yes ☐ No ☐

Reason:

.....

.....

.....

.....

.....

.....



Yes ☐ No ☐

Reason:

.....

.....

.....

.....

.....

.....



Situations at work – Is safe working possible?

Please decide, whether a safe manner of working is provided in the images shown below and please state a reason.



Yes ☐ No ☐

Reason:

.....

.....

.....

.....

.....

.....



Yes ☐ No ☐

Reason:

.....

.....

.....

.....

.....

.....



Yes ☐ No ☐

Reason:

.....

.....

.....

.....

.....

.....



Situations at work – Is safe working possible?

Please decide, whether a safe manner of working is provided in the images shown below and please state a reason.



Yes ☐ No ☐

Reason:

.....

.....

.....

.....

.....

.....



Yes ☐ No ☐

Reason:

.....

.....

.....

.....

.....

.....



Yes ☐ No ☐

Reason:

.....

.....

.....

.....


.....

.....



Situations at work – Is safe working possible?

Please decide, whether a safe manner of working is provided in the images shown below and please state a reason.



Yes ☐ No ☐

Reason:

.....

.....

.....

.....

.....

.....



Yes ☐ No ☐

Reason:

.....

.....

.....

.....

.....

.....



Yes ☐ No ☐

Reason:

.....

.....

.....

.....

.....

.....



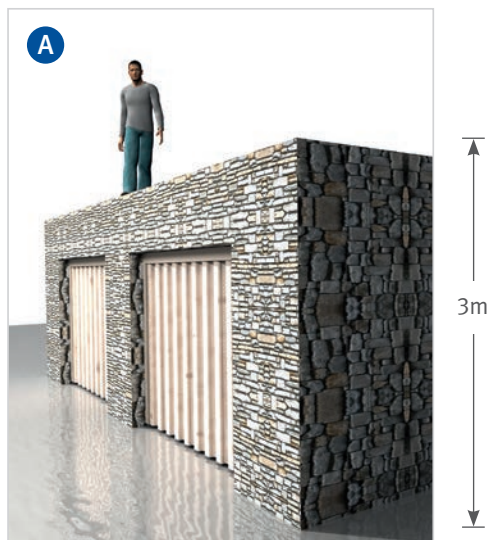
Notes




Notes



**Choose the appropriate device (please see next page I-V)
for each of the situations shown below (A-E):**



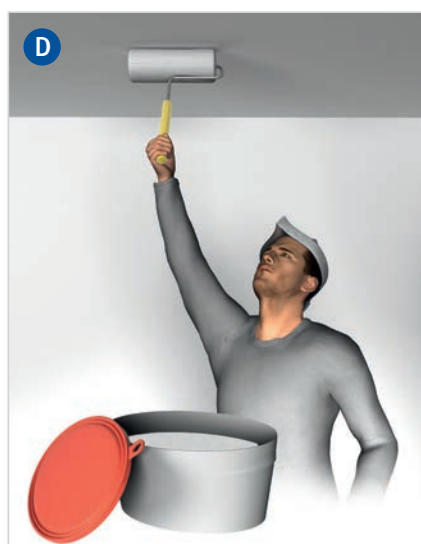
To climb up onto a roof




To clean a window



Exchange a fluorescent lamp



For painting the ceiling



Take boxes off the shelf



**Choose the appropriate device (please see I-V)
for each of the situations shown before (A-E):**



A-frame stepladder



Wheeled scaffolding



Leaning ladder



Mobile elevating work platform



Platform ladder

Solution:


Choose the appropriate device (please see I-V)
for each of the situations shown before (A-E):

A = <input type="radio"/>	B = <input type="radio"/>
C = <input type="radio"/>	D = <input type="radio"/>
E = <input type="radio"/>	



When will the ladder tip over?

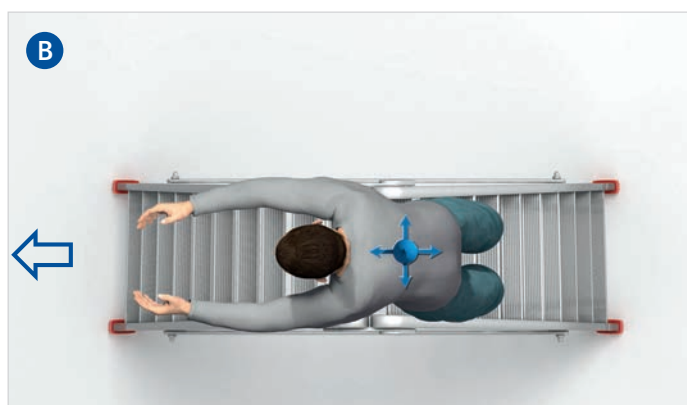
The ladder as seen from above:



1. In which direction is this ladder more stable?



In direction **A** ☐




In direction **B** ☐



When will the ladder tip over?


2. When will this ladder become unstable?



As shown in **A** ☐



As shown in **B** ☐



As shown in **C** ☐



Situations at work – Is safe working possible?

Please decide, whether a safe manner of working is provided in the images shown below and please state a reason.



Yes ☐ No ☐

Reason:

.....

.....

.....

.....

.....

.....



Yes ☐ No ☐

Reason:

.....

.....

.....

.....

.....

.....



Yes ☐ No ☐

Reason:

.....

.....

.....

.....

.....

.....



Situations at work – Is safe working possible?

Please decide, whether a safe manner of working is provided in the images shown below and please state a reason.



Yes ☐ No ☐

Reason:

.....

.....

.....

.....

.....

.....



Yes ☐ No ☐

Reason:

.....

.....

.....

.....

.....

.....



Yes ☐ No ☐

Reason:

.....

.....

.....

.....

.....

.....



Situations at work – Is safe working possible?

Please decide, whether a safe manner of working is provided in the images shown below and please state a reason.



Yes ☐ No ☐

Reason:

.....

.....

.....

.....

.....

.....



Yes ☐ No ☐

Reason:

.....

.....

.....

.....

.....

.....



Yes ☐ No ☐

Reason:

.....

.....

.....

.....


.....

.....



Situations at work – Is safe working possible?

Please decide, whether a safe manner of working is provided in the images shown below and please state a reason.



Yes ☐ No ☐

Reason:

.....

.....

.....

.....

.....

.....



Yes ☐ No ☐

Reason:

.....

.....

.....

.....

.....

.....



Yes ☐ No ☐

Reason:

.....

.....

.....

.....

.....

.....



Notes



Notes



**Choose the appropriate device (please see I-V)
for each of the situations shown before (A-E):**



A-frame stepladder



Wheeled scaffolding



Leaning ladder



Mobile elevating work platform



Platform ladder

Solution:


Choose the appropriate device (please see I-V)
for each of the situations shown before (A-E):

A = <input type="radio"/>	B = <input type="radio"/>
C = <input type="radio"/>	D = <input type="radio"/>
E = <input type="radio"/>	



When will the ladder tip over?

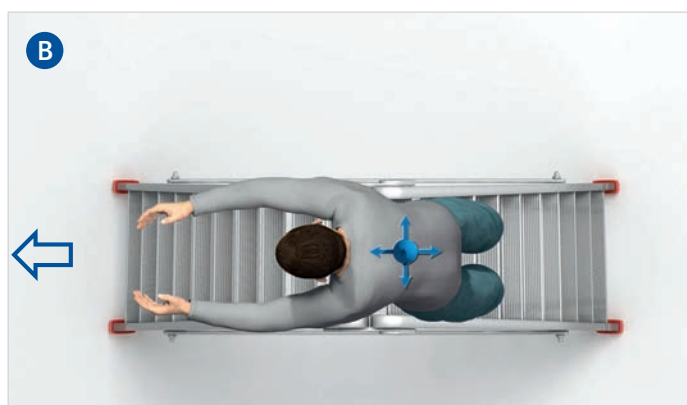
The ladder as seen from above:



1. In which direction is this ladder more stable?



In direction **A** ☐




In direction **B** ☐



When will the ladder tip over?


2. When will this ladder become unstable?



As shown in **A** ☐



As shown in **B** ☐



As shown in **C** ☐



Situations at work – Is safe working possible?

Please decide, whether a safe manner of working is provided in the images shown below and please state a reason.



Yes ☐ No ☐

Reason:

.....

.....

.....

.....

.....

.....



Yes ☐ No ☐

Reason:

.....

.....

.....

.....

.....

.....



Yes ☐ No ☐

Reason:

.....

.....

.....

.....

.....

.....



Situations at work – Is safe working possible?

Please decide, whether a safe manner of working is provided in the images shown below and please state a reason.



Yes ☐ No ☐

Reason:

.....

.....

.....

.....

.....

.....



Yes ☐ No ☐

Reason:

.....

.....

.....

.....

.....

.....



Yes ☐ No ☐

Reason:

.....

.....

.....

.....

.....

.....



Situations at work – Is safe working possible?

Please decide, whether a safe manner of working is provided in the images shown below and please state a reason.



Yes ☐ No ☐

Reason:

.....

.....

.....

.....

.....

.....



Yes ☐ No ☐

Reason:

.....

.....

.....

.....

.....

.....



Yes ☐ No ☐

Reason:

.....

.....

.....

.....


.....

.....



Situations at work – Is safe working possible?

Please decide, whether a safe manner of working is provided in the images shown below and please state a reason.



Yes ☐ No ☐

Reason:

.....

.....

.....

.....

.....

.....



Yes ☐ No ☐

Reason:

.....

.....

.....

.....

.....

.....



Yes ☐ No ☐

Reason:

.....

.....

.....

.....

.....

.....



Notes



Notes